

COMPETENCE BASED CURRICULUM

HOMEWORK ENGAGEMENT PROGRAM

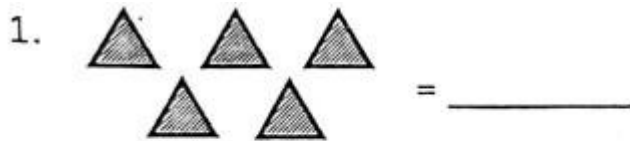
GRADE 1 2024

AUGUST

MATHEMATICS

Questions

1. Count and write.




2. Circle the given numbers.

1. Number 9 = 9, 6, 8, 7

2. Number 5 = 2, 3, 4, 5

3. Draw objects e.g.

two balls = 

1. Four cups =

2. Three eggs =

4. Put together.

1. $3 + 1 =$ _____

2. $2 + 1 + 3 =$ _____

3. $4 + 3 =$ _____

5. Match number with its name.

6

Two

8

six

2

Eight

6. Fill the missing numbers.

1. 2, 3, 4, _____, 6, 7.

2. 10, 11, 12, _____, 14, 15

3. A hen has _____ legs.



(2, 4, 0)

4. A snake has _____ legs.



(0, 2, 4)

7. **Add.**

1.8 + 1 = _____

2.4 + 5 = _____

3.6

+3

4.I have _____ fingers. (5,10)

8. **Take away.**

1.  -  = _____

2.5 - 2 = _____

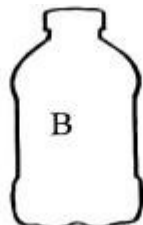
3.8 - 6 = _____

9. **Measurement**



1. _____

2. **Colour the bigger one.**



3. **Which bottle holds more water?**

10. **Name the items.**

1.



2. _____

(radio, clock)

11. One week has _____ days. (7, 4, 5)

12. **Fill in the blank spaces.**

1. M____nday


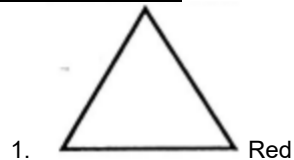
2. Fr____day



= sh. _____

3. How much is this money?

13. **Colour the shapes.**



Answers

1. 1. 5 (five)
2. 3 (three)

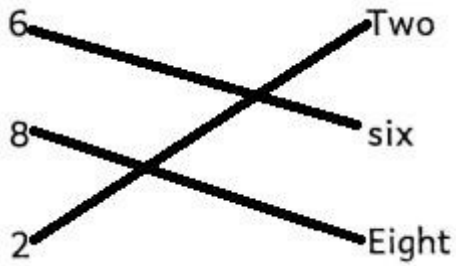
Number 9 = **9**, 6, 8, 7

2. Number 5 = 2, 3, 4, **5**



4. 1. 4
2. 7

3. 8



5.

6.

1. 5

2. 13

3. 2

4. 0

7.

1. 9

2. 9

3. 9

4. 10

8.

1. $4-1=3$

2. 3

3. 2

9.

10.

1. clock

2. radio

11. 7

12.

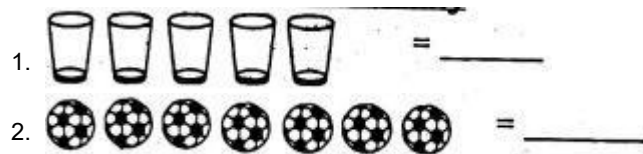
1. Monday

2. Friday

3. sh. 20

13. –To be assessed by the teacher.

2. **Count and write how many**

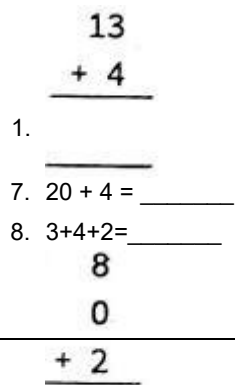


6. **Put the missing numbers in tens and ones**

1. $24 = \underline{\hspace{1cm}}$ tens $\underline{\hspace{1cm}}$ ones

2. $18 = \underline{\hspace{1cm}}$ tens $\underline{\hspace{1cm}}$ ones

7. **Add**



4.

$$\begin{array}{r} 30 \\ + 20 \\ \hline \end{array}$$

5.

2 **Write the missing numbers**

4. 20, 30, 40, _____

5. 11, 10, 9, 8, _____

3 **Write in words or symbols**

4. 13 = _____

5. Eight = _____

6. I have _____ fingers.

7. A rat has _____ tail.

8. To has 14 sweets. He gave Willy 4 sweets. How many sweets did he remain with? _____

9. Awili has 9 goats and 8 sheep. How many animals does he have? _____

10. Which one is longer?

A 

B 

11. Which one holds less water?

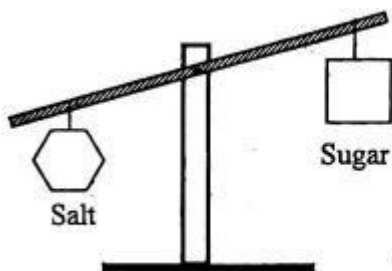


cup



bucket

8. Which one is heavier?



9. Which one is a need?



A



B

10. Add the money



+



= Sh. _____

11. This is a _____



(clock, phone)

11. Name the missing day. Monday,

_____, Wednesday

13. Mary is _____ than Judy.



Mary



Judy

(taller, shorter)

14. Name the lines



1.




2.



(straight, curved)

2. Name the shapes



1.



2.



(triangle, circle)

5. Complete the pattern

Answers

9. 1. 5
2. 7

14. 1. 2 - tens, 4 - ones
2. 1 - tens, 8 -ones

15. 1. 17
2. 24
3. 9
4. 10
5. 50

16. 1. 50
2. 7

17. 1. Thirteen
2. 8
3. 10
4. 1
5. 10
6. 17

18.A

19.cup

20.salt

21.B

22. Sh. 30

23. clock

24. Tuesday

25. taller

26. 1. curved
2. straight

27. 1. circle
2. triangle



16.