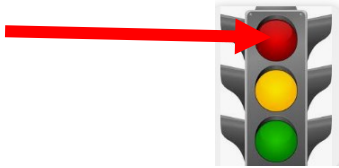


COMPETENCE BASED CURRICULUM HOMEWORK ENGAGEMENT PROGRAM GRADE 3 2024 AUGUST INTEGRATED ACTIVITY

TASK 1: ENVIRONMENTAL ACTIVITIES

1. The road sign below means



(stop, get ready, go)

2. A road which passes in the forest to school is _____

(unsafe, safe, straight)

3. Pedestrians should cross a road safely at _____

(zebra crossing, bumps, highway)

4. The feature below is a _____



(lake, river, dam)

5. Name the farm tool below.



(Fork, ,Rake, Slasher)

6. The sun sets in the _____

(East, South, North, West)

7. What is the weather?



(windy, stormy, rainy)

8. Which one is not a wild animal? _____

(Duck, Monkey, Ostrich)

9. Ben wants to carry a sack of maize. He can use a _____

(hen, dog, donkey)

10. Which colour of our flag means peace? _____

(Black, Red, white, Green)

11. The soil with fine particles is _____ soi;

(sandy, loam, clay)

12. A tap is a source of clean water. True or False? _____

13. Calvin drank dirty water. He will be _____

(healthy, sick, dirty)

14. Shantel carried this item when going to school. The weather is _____.



(cloudy, windy, rainy)

15. _____ is a long period without rainfall.

(Drought, Flood, Desert)

16. Julie wets her bed at night. She may be taking _____ before sleeping.

(rest, sweets, water)

17. When we don't have toothpaste we can use _____

(wood ash, salt, milk)

18. _____ is an international parasite.

(Lice, Tapeworm, Housefly)

19. These items are found in the _____

Bedcover

sheet

mattress

blanket

(Kitchen, Bathroom, Bedroom)

20. Draw and colour a mattress



6. Which personal item is used to clean our nose? _____

7. A bed bug is an external parasite. True or False? _____

8. _____ is not grown in the kitchen garden.

(Carrot, Kales, Tea)

9. Drinking water should be _____

(boiled, cleaned, filtered)

10. Mosquitoes spread _____

(Headache, Malaria, Diarrhoea)

11. Meat, milk and eggs provide us with _____

(carbohydrates, proteins, vitamins)

12. A baby is born with _____ teeth.

(one, two, no)

13. Draw and colour a ripe apple.



14. Julie goes to the toilet many times. She has _____

(Coughs, Headache, Diarrhoea)

15. A _____ treats our teeth.

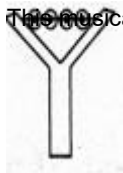
(Optician, dentist)

TASK 2: CREATIVE ACTIVITIES

1. We use a _____ for dribbling. **(rope, ball, hoops)**


2. _____ will float on water. **(Feathers, Coins, Nails)**

3. This musical instrument is called a _____



(flute, horn, shaker)

4. This animal moves by _____



(floating, swimming, crawling)

5. Name this item. _____



(aeroplane, roller, propeller)

6. **Draw and colour a drum as a musical instrument.**



7. When dribbling the ball, we keep it closer to our body _____

(legs, body, legs)

8. When girls sing, their faces look like this.



The girls are _____ **(sad, tired, happy)**

9. When we dance, our _____ does not move. **(legs, hands, stomach)**

10. Which shape can be used to make a wheel? _____ **(Triangle, Oval, Circular)**

TASK 3: CHRISTIAN RELIGIOUS ACTIVITY

1. The birth of Jesus is celebrated on _____

(25th December, 25th March, 26th December)

2. Father, _____ children make a nuclear family. **(cousins, aunts, mother)**

3. Jesus held hand of Jairus _____ and said,

"Talitha Koum."

(son, widow, daughter)

4. Jesus hometown was at _____
(Jericho, Bethlehem, Nazareth)
5. We should have _____ in God. (faith, hate, riches)
6. Draw and colour the house of God



7. Mark, John, _____ and Mathew are gospel books.
(Acts, Genesis, Luke)
8. _____ was the wife to Adam. (Esther, Eve, Elizabeth)
9. Old Testament has _____ books. (27, 66, 39)
10. Adam and his wife were sent away from the garden of Eden because they _____ God.
(Loved, disobeyed, hated)

TASK 4: ISLAMIC RELIGIOUS ACTIVITIES

1. Muslims pray while facing _____ (Qiblah, Moon, Sun)
2. We attend the Mosque on _____ (Friday, Sunday, Saturday)
3. _____ is the messengers of Allah. (SW)
(Issah, Mohammad, Musa)
4. The holy book of Zaboor was given to Nabii _____ (Musa, Muhammad, Dawood)
5. Muslims fast in the month of _____ (Idd-UI-Fitr, Muharrum, Ramadhan)
6. Prophet Mohammad (PBUH) was born in the city of _____ (Madina, Mecca, Athrab)
7. We take _____ before attending prayers. (hudhu, food, wine)
8. _____ is not good (Prayers, Alcohol, Food)
9. We pray in the holy place known as the _____ (Mosque, Church, Temple)
10. Angel _____ is in charge of Wahyi.

MARKING SCHEME

Task 1 : Environmental activities

1. Stop
2. unsafe
3. zebra crossing
4. river
5. rake
6. West
7. rainy
8. Duck
9. donkey
10. White
11. clay
12. True
13. sick
14. rainy
15. Drought
16. water
17. salt

3. Tapeworm
4. Bedroom
5. Teacher to assess
6. Handkerchief
7. True
8. Tea
9. Boiled
10. Malaria
11. proteins
12. no
13. Teacher to assess
14. Diarrhoea
15. Dentist

Task 2: Creative Activities

1. ball
2. Feather
3. shaker
4. swimming
5. propeller
6. Teacher to assess
7. legs
8. happy
9. stomach
10. Circular

Task 3: Christian Religious Activity

1. 25th December
2. Mother
3. daughter
4. Nazareth
5. faith
6. Teacher to assess
7. Luke
8. Eve
9. 39
10. disobeyed