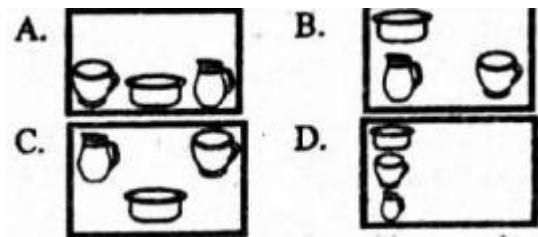


# **COMPETENCE BASED CURRICULUM HOMEWORK ENGAGEMENT PROGRAM GRADE 6 2024 AUGUST CREATIVE ARTS**

---

1. Which one of the pictures below shows a drawing with balanced objects?



- A. A
- B. B
- C. C
- D. D


2. The surface quality of an object can be called

- A. tone
- B. texture
- C. variation
- D. smoothness

3. In picture making, we can use \_\_\_\_\_ to show the surface quality of a drawing.

- A. paint
- B. cotton wool
- C. water
- D. dots

4. Observe the pictures below.



The type of composition shown above is called \_\_\_\_\_ composition.

- A. sports
- B. throwing
- C. imaginative
- D. ball game

5. Samoei collected the following materials:

**i) Picture cut outs**

**ii) Adhesive**

**iii) Manila paper**

Which picture making technique did he want to practise?

- A. Montage
- B. Stippling
- C. Sticking
- D. Collage

6. A group of Grade six learners made a wristband like the one shown below.



Which of the following pairs of material were they likely to have used?

- A. Wax and glue
- B. Leather and beads
- C. Beads and plastic
- D. Hard paper and leather

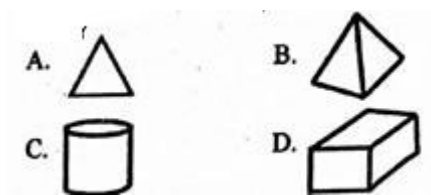
7. A floor mat and basket can both be made using

- A. pasting method.
- B. modelling technique.
- C. coil and stitch technique.
- D. cutting and pasting technique.

8. Use of closely drawn lines on a drawing to show the effects of light and darkness is called

- A. stippling
- B. shading
- C. smudging
- D. cross hatching

9. Which of the following forms is not in a 3D form?



- A. A
- B. B
- C. C
- D. D

10. Which of the following can be decorated using applique?

- A. Clay materials
- B. Finished woodwork items
- C. Book jackets
- D. Plastic items

11.

Sing the song written below.

**"Ninaipenda nchi yangu,**

**naitambua Kenya yangu, Ooh**

**viongozi wetu wa bidii,**

**Ee wao hufanya kazi bila ubaguzi, lelele!"** The

type of song written above is a

- A. lullaby
- B. gospel song
- C. sacred song
- D. patriotic song

12. All the following are social-economic importance of songs **except** that they

- A. are used to shape morals.
- B. can be used to encourage bad behaviour.
- C. help in promoting unity.
- D. can be used to promote peace.


13. Which one of the following types of folk songs can be sung in a burial ceremony?

- A. Marriage folk song.
- B. Funeral folk songs.
- C. Initiation folk songs.
- D. Worship folk songs.

14. Which part of a fiddle is normally bowed to produce sound?

- A. String
- B. Bow
- C. Membrane
- D. Bridge

15. Which of the following is not a string instrument?



- A. A
- B. B
- C. C
- D. D

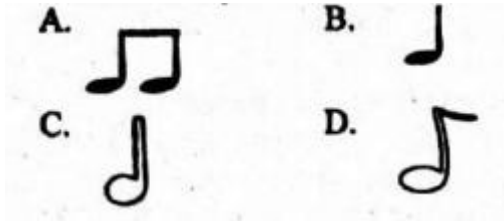
16. When three people sing a three part song, we say they are singing in a

- A. pair
- B. duet
- C. solo
- D. trio

17. All the following are messages found in the Kenya National Anthem. Which one is **not**?

- A. The importance of maintaining peace among East African countries.
- B. We expect blessings from God.
- C. The importance of hard work.
- D. The need to have peace within our nation.

18. Which of the following musical instruments is played differently?



- A. A
- B. B
- C. C
- D. D

19. Which of the following symbols represents the French rhythm name *taa - aa*?

- A. A
- B. B
- C. C
- D. D

20. What is the role of a soloist in a folk dance?

- A. Playing the instruments.
- B. Leading other performers.
- C. Receiving the message.
- D. Decorating the bodies of folk dancers.

## Answers

1. C

2. texture

3. dots

4. imaginative

5. Montage

6. Leather and beads
7. coil and stitch technique.
8. cross hatching
9. A
10. Book jackets
11. patriotic song
12. can be used to encourage bad behaviour.
13. Funeral folk songs.
14. String
15. B
16. trio
17. The importance of maintaining peace among East African countries.
18. A
19. C
20. Leading other performers.