

THE KENYA JUNIOR SCHOOL EDUCATION ASSESSMENT.

GRADE 7.

PETECHNICAL STUDIES- (Theory)

JULY-AUGUST

Time: 1½ Hours.

SCHOOL BASED ASSESSMENT.

HOMEWORK ENGAGEMENT

PRETECHNICAL STUDIES.

Learner's Name: _____

Assessment No: _____ **Grade:** _____

Date: _____

FOR EXAMINERS USE ONLY.

Score Range	Performance Level	Tick
80-100	Exceeding Expectation	
60-79	Meeting Expectations	
40-59	Approaching Expectations	
Below 40	Below Expectations	

OUT OF	50 MARKS
Learners Score.	
Learners %	

Instructions to Learners.

- Write your name, stream and register in the spaces provided above.
- Sign and write the date of examination in the space provided above.
- Answer all questions in this question paper.
- All your answers must be written in the spaces provided below each question.
- This paper consists of printed pages. Learners should check the questions in each paper to ascertain that all the papers are printed as indicated and that there is no question missing.
- Answer all the questions in English.

QUESTIONS.

1. Explain one way Pretechnical studies promotes independence in the society. **(2mks)**

2. List down four ways you can use to keep personal and sensitive data away from the public when you are online. **(4mks)**

3. Give the four classifications of computers according to size. **(4mks)**

4. Identify the following basic symbols used in technical drawing. **(3mks)**



R



5. List down four characteristics of economic resources. **(4mks)**




6. Classify the following correctly into the three categories of economic resources. **(6mks)**

Classroom, welder, sunlight, electricity, forests, surgeon.

Categories			
Resources.	1.	1.	1.
	2.	2.	2.

7. Give the identity and the use in which each of the following tools are used.

(6mks)

		
Name:	Name:	Name:
Use:	Use:	Use:

8. State two importance of lubricating marking and measuring tools as a way of maintaining them.**(2mks)**

9. Grade seven learners of Bungoma junior school were discussing about production of goods and services. State two importance of production of goods and services in the society. **(2mks)**

10. By giving their meaning, state the difference between goods and services.

(2mks)

11. Write down four different groups in which goods are classified. **(4mks)**

12. Give two qualities of an entrepreneur. **(2mks)**

13. _____ refers to the thought that is in the mind of an entrepreneur concerning a potential business opportunity. **(1mk)**

14. State two factors entrepreneurs should consider to enhance business success in the society. **(2mks)**

15. Give three characteristics of money. **(3mks)**

16. Name the three symbols found on the Kenyan currency note with agriculture as the theme. **(3mks)**

THIS IS THE LAST PRINTED PAGE.