

COMPETENCE BASED ASSESSMENT
(C.B.A.)
KENYA EDUCATION READINESS ASSESSMENT
PRE-PRIMARY EDUCATION
PP 1
MATHEMATICS ACTIVITY
HOMEWORK ENGAGEMENT

NAME: _____

SCHOOL: _____

ASSESSMENT NUMBER: _____ DATE: _____

BOY

☐

GIRL

☐

FOR EXAMINERS USE ONLY.

Score Range	Performance Level	Tick
80-100	Exceeding Expectation	
60-79	Meeting Expectations	
40-59	Approaching Expectations	
Below 40	Below Expectations	


OUT OF	50 MARKS
Learners Score.	
Learners %	

LEARNERS INSTRUCTIONS

1. WRITE YOUR NAME AND ASSESSMENT NUMBER IN THE SPACES PROVIDED ABOVE
2. ANSWER ALL THE QUESTIONS IN THIS PAPER.
3. ALL YOUR ANSWERS MUST BE WRITTEN IN THE SPACES PROVIDED IN THE QUESTION PAPER.
4. LEARNERS SHOULD CHECK THE QUESTION PAPER TO ASCERTAIN THAT ALL THE PAGES ARE PRINTED AS INDICATED AND THAT NO QUESTIONS ARE MISSING.
5. LEARNERS MUST ANSWER THE QUESTIONS IN ENGLISH

(1 Marks)

1. Colour the smaller ones.

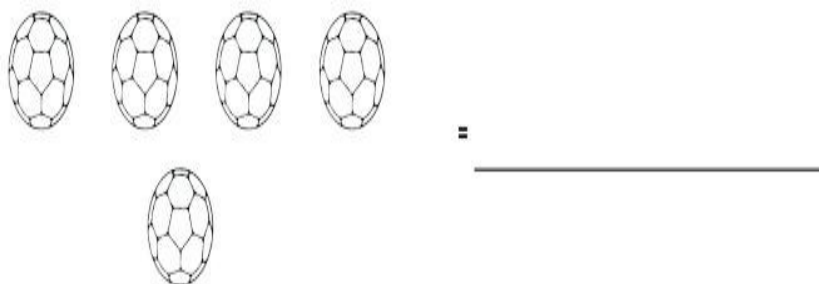


(1 Marks)

2. We do not go school on and

(1 Marks)

3. Count and write.



(5 Marks)

4. Write number 1-5

_____, _____, _____, _____, _____

(3 Marks)

5. **Write the missing numbers**

1 _____ 3 _____ 5 _____ 7

(1 Marks)


6. $3 + 7 =$ _____

(5 Marks)

7. Write the numbers 1-8

(1 Marks)

8. Circle the longer one



9. Recognize the number and colour.

(3 Marks)



10. $9 - 3 = \underline{\hspace{2cm}}$

(1 Marks)

11. $9 - 4 = \underline{\hspace{2cm}}$

(2 Marks)

12. $5 - 2 = \underline{\hspace{2cm}}$


(1 Marks)

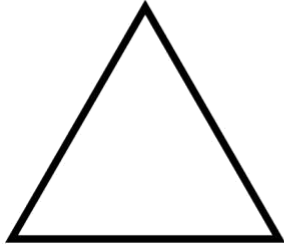
13. $6 - 2 = \underline{\hspace{2cm}}$

(2 Marks)

14. Name the shapes.

(2 Marks)





15. I get up in the
(Morning, night)

(1 Marks)


16. Recognize the number and colour.

(1 Marks)



17. Circle the smaller one.

(1 Marks)



(10 Marks)

18. Fill in the numbers

1, 2, _____, _____, _____

6, 7, _____, _____, _____

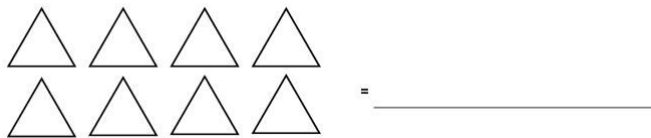
(1 Marks)

19. Recognize the number and colour.

5

(1 Marks)

20. Count and write.



(3 Marks)

21. **Fill missing numbers**

1 _____ 4 5
_____ 7 _____ 9

22. Join the dots



(3 Marks)

(Confidential)

Marking Scheme

1. Smaller one coloured.	(1 Marks)
2. Saturday, Sunday.	(1 Marks)
3. 5	(1 Marks)
4. 1,2,3,4,5	(5 Marks)
5. 2,4,6	(3 Marks)
6. 10	(1 Marks)
7. numbers written	(1 Marks)
8. Longer pencil circled	(1 Marks)
9. 2	(1 Marks)
10. 6	(1 Marks)
11. 5	(2 Marks)
12. 3	(1 Marks)
13. 4	(2 Marks)
	(2 Marks)

14. Square.
Triangle.

- | | |
|--------------------------|------------|
| 15. Morning. | (1 Marks) |
| 16. 6 | (1 Marks) |
| 17. Smaller one circled. | (1 Marks) |
| 18. 3,4,5 8,
9, 10 | (10 Marks) |
| 19. 5 | (1 Marks) |
| 20. 8 | (1 Marks) |
| 21. 2, 3, 6, 8 | (3 Marks) |
| 22. 4 | (1 Marks) |